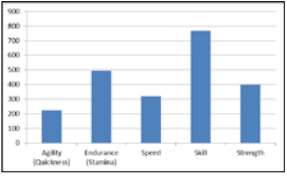
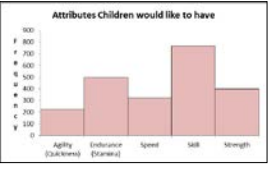
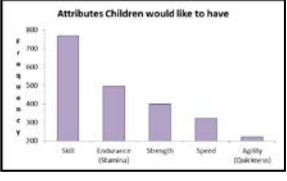
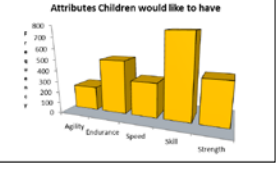
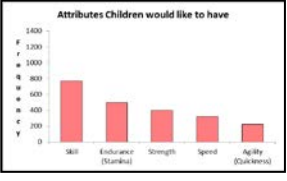
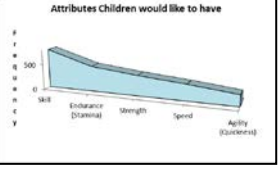


BAD BAR CHARTS - SOLUTIONS



TASK A

Below are six bad bar charts. Write down what is wrong with each.

<p>1</p>  <p>No labelling of axis No title It is good practice to have the heights of the bars ordered, tallest first</p>	<p>2</p>  <p>There should be gaps between the bars as this chart represents qualitative data It is good practice to have the heights of the bars ordered, tallest first</p>
<p>3</p>  <p>The vertical axis does not start at zero</p>	<p>4</p>  <p>It is bad practice to display data using 3-D bar charts as this distorts the heights of the bars.</p>
<p>5</p>  <p>The vertical axis extends too far beyond the heights of the bars</p>	<p>6</p>  <p>It is bad practice to display data using 3-D bar charts as this distorts the heights of the bars. Also, there should be gaps between the bars as this chart is representing qualitative data</p>

BAD BAR CHARTS - SOLUTIONS



TASK B

